


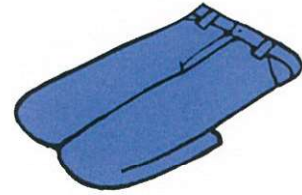
Card

1

Using more than one operation



- 1) Each week it takes Abe 7 minutes to clean out his rabbit's cage. How long will Abe spend cleaning out the cage in total after a 10-week school term? How long will he spend cleaning out the cage in four 10-week terms?
- 2) Greg's mum gave him \$97 to spend on clothes at the mall. He bought 2 shirts for \$9 each and a pair of pants for \$15. How much money does Greg have left?



No Nonsense Maths Problems Book 1 Stage 6

Card

2

Using more than one operation



- 1) It takes Grace 6 minutes to make her bed. If Grace makes her bed once a week, how long will she spend making her bed this year?
- 2) It takes Tamati 54 minutes to eat 6 rolls of sushi. How long does it take him to eat 4 rolls?
- 3) Suzi takes 30 minutes to cycle 4 km at the gym. If she cycles at a consistent speed, how many kilometres will she cycle in 2 hours?




No Nonsense Maths Problems Book 1 Stage 6

Card

3

Using more than one operation



- 1) Olivia has 2 more stickers than Gracie. Brooke has 6 times as many stickers as Olivia. If Brooke has 42 stickers, how many does Gracie have?
- 2) Manu eats 5 apples in 20 minutes. How long does it take him to eat 3 apples?
- 3) Callum has 4 times as many dinosaurs as Nicholas. Joseph has one less dinosaur than Nicholas. If Callum has 28 dinosaurs, how many does Joseph have?



No Nonsense Maths Problems Book 1 Stage 6

Card

4

Using more than one operation



- 1) Each day Alistair spends 10 minutes making his bed, 7 minutes taking out the rubbish and 5 minutes clearing the table. How much time does he spend on chores each week?
- 2) A rugby team go on tour. They take 5 cars with 2 passengers in each car and 4 vans with 9 passengers in each van. How many players go on tour excluding the drivers?




No Nonsense Maths Problems Book 1 Stage 6

Card

5

Using more than one operation



- 1) Angus, Connor, Cameron and Olivia earn \$84 by cleaning cars. They combine their earnings and share their profits equally. After spending \$12 on supplies, how much does each person get?
- 2) Mike has 5 more rugby cards than Joseph. Riley has 7 times as many cards as Mike. If Riley has 56 rugby cards, how many does Joseph have?



No Nonsense Maths Problems Book 1 Stage 6


Card

6

Using more than one operation



- 1) A bag of apples costs \$3 and a bunch of bananas costs \$2. The school tuck shop buys 7 bags of apples and 4 bunches of bananas. How much does the tuck shop spend on fruit altogether?
- 2) Tiaki and his friends Jake and Tom deliver 392 newspapers after school. If Tiaki delivers 128 newspapers and Jake delivers 139, how many newspapers does Tom deliver?



No Nonsense Maths Problems Book 1 Stage 6